









Nome Classe Data

STIMA DI QUANTITÀ

- COLORA GLI INSIEMI CHE HANNO LA STESSA QUANTITÀ DI ELEMENTI.



- COME HAI FATTO A CAPIRE QUALI SONO I GRUPPI CHE HANNO LA STESSA QUANTITÀ DI ELEMENTI?

.....

- QUANTI GRUPPI HAI COLORATO?

.....