



I VAGONI DEL TRENO



- Numera i vagoni del treno in senso progressivo a partire dal numero scritto sulla locomotiva.





- Numera i vagoni del treno in senso regressivo, a partire dall'ultimo vagone fino alla locomotiva.




- Scrivi il numero precedente.



- Scrivi il numero successivo.



- Scrivi i numeri che mancano per completare la sequenza.



ORDINARE NUMERI NATURALI.