


LE FIGURE PIANE

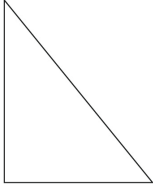
▪ Scrivi il nome delle figure piane che riconosci fra quelle disegnate qui sotto.

A



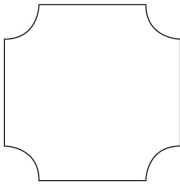
.....

B




.....

C



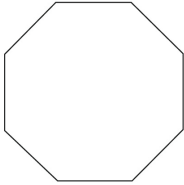
.....

D



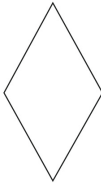
.....

E



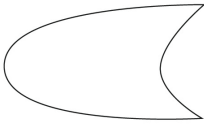
.....

F




.....

G



.....

H




.....

▪ Scrivi nella tabella le lettere delle figure dell'esercizio precedente nella casella giusta.

POLIGONI	NON POLIGONI
.....
.....
.....
.....

▪ Completa:

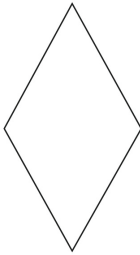


è un

ha lati

ha vertici

ha angoli

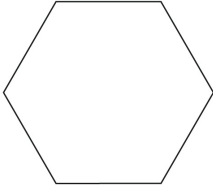


è un

ha lati

ha vertici

ha angoli




è un

ha lati

ha vertici

ha angoli



è un

ha lati

ha vertici

ha angoli

DENOMINARE, CLASSIFICARE E DESCRIVERE FIGURE PIANE.

Nome:

Classe: Data: