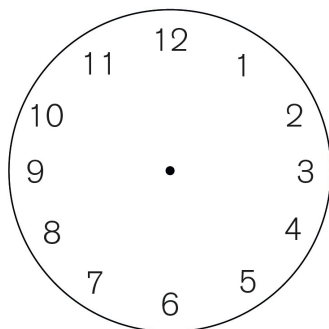
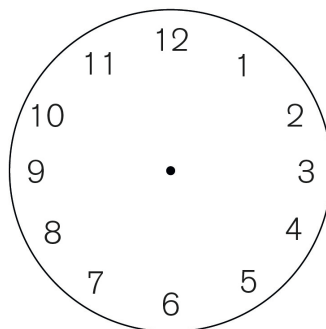


WHAT'S THE TIME?

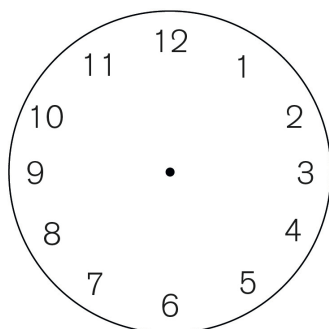
- Read and draw the clock hands.



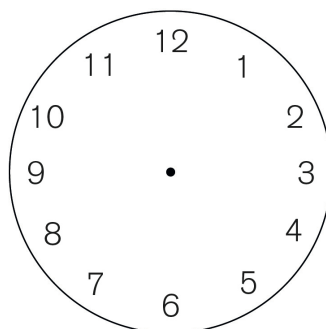
It's half past nine.



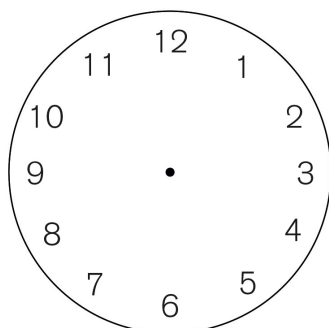
It's ten past two.



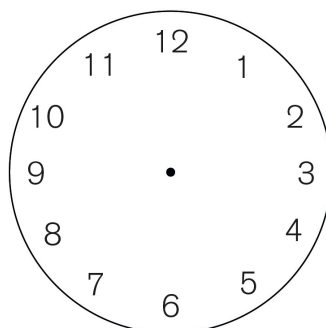
It's a quarter to seven.



It's a quarter to eleven.



It's twenty to three.



It's half past four.

LEGGERE E COMPRENDERE L'ORA.

Nome: _____

Classe: _____ Data: _____