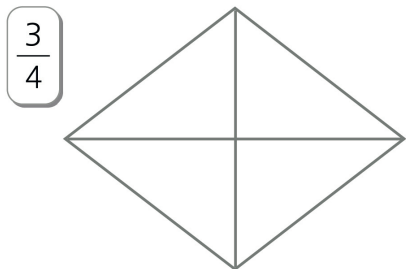
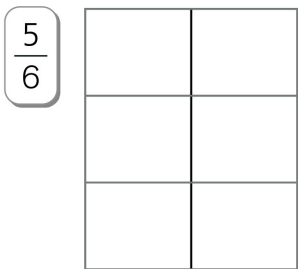
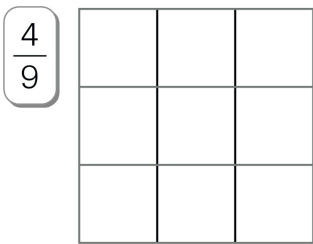
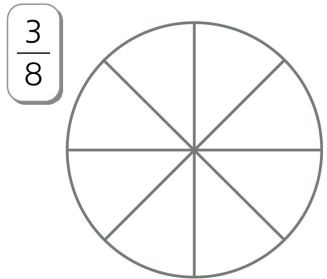
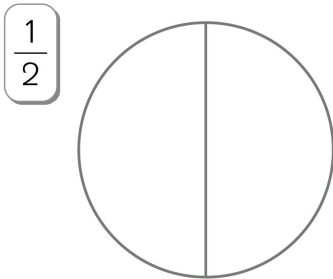
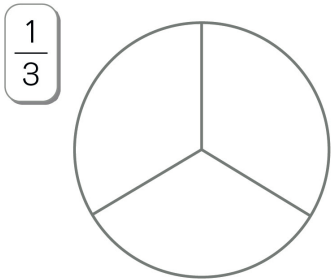


FRAZIONI

• Colora le parti indicate dalle frazioni.



• Riscrivi le frazioni dell'esercizio precedente in lettere.

▪	▪
▪	▪
▪	▪

• Completa con i simboli $>$, $<$ o $=$. Se ti aiuta, disegna la frazione sul quaderno.

$\frac{5}{12}$ $\frac{5}{20}$

$\frac{3}{1000}$ $\frac{15}{1000}$

$\frac{3}{6}$ $\frac{5}{6}$

$\frac{2}{4}$ $\frac{1}{2}$

$\frac{7}{7}$ $\frac{9}{9}$

$\frac{8}{3}$ $\frac{3}{5}$

• Scrivi la frazione che manca per arrivare all'intero.
Se ti aiuta, disegna la frazione sul quaderno.

$\frac{1}{3} \rightarrow \frac{\quad}{\quad}$

$\frac{2}{5} \rightarrow \frac{\quad}{\quad}$

$\frac{4}{8} \rightarrow \frac{\quad}{\quad}$

$\frac{3}{4} \rightarrow \frac{\quad}{\quad}$

$\frac{4}{7} \rightarrow \frac{\quad}{\quad}$

$\frac{8}{10} \rightarrow \frac{\quad}{\quad}$

OPERARE CON LE FRAZIONI.

Nome: _____
Classe: _____ Data: _____