
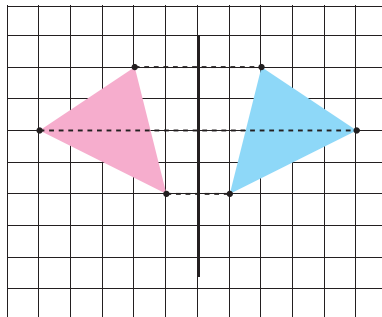
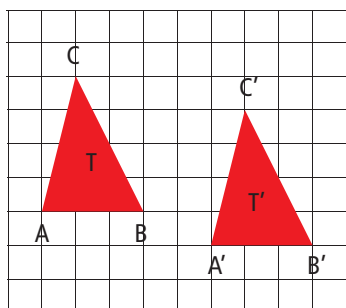


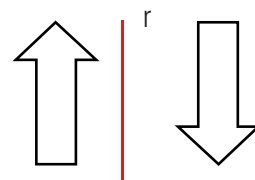
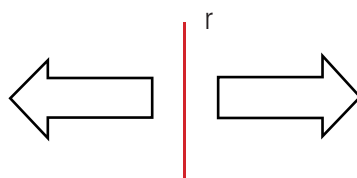
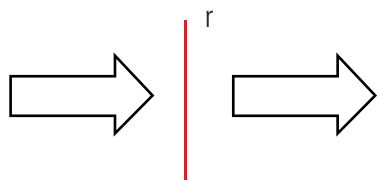
Nome ..... Classe ..... Data .....

## ISOMETRIE



- Quale delle seguenti immagini rappresenta una traslazione della figura?



- Cerchia la coppia di figure tra le seguenti che è simmetrica rispetto all'asse  $r$ ?



- In ciascuna delle seguenti figure tracciare l'asse di simmetria.


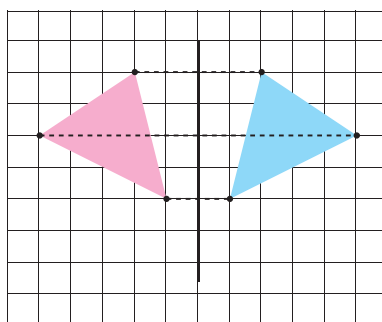
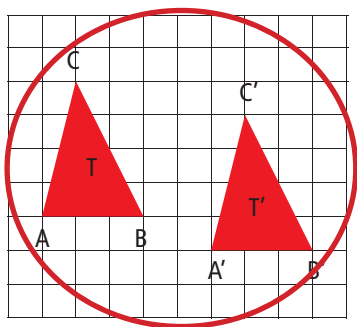


RICONOSCERE ROTAZIONI, TRASLAZIONI E SIMMETRIE.

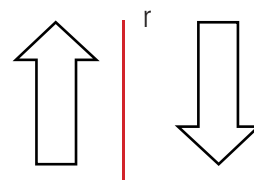
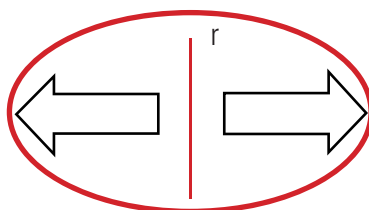
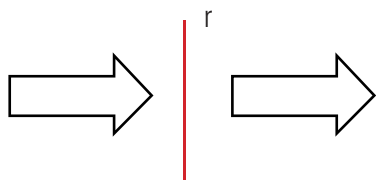
Nome ..... Classe ..... Data .....

## ISOMETRIE



- Quale delle seguenti immagini rappresenta una traslazione della figura?



- Cerchia la coppia di figure tra le seguenti che è simmetrica rispetto all'asse  $r$ ?



- In ciascuna delle seguenti figure tracciare l'asse di simmetria.



RICONOSCERE ROTAZIONI, TRASLAZIONI E SIMMETRIE.