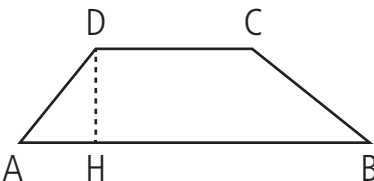
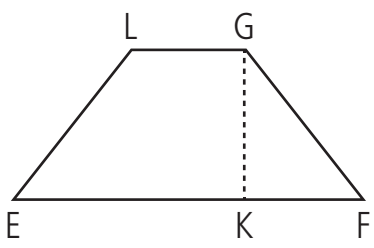
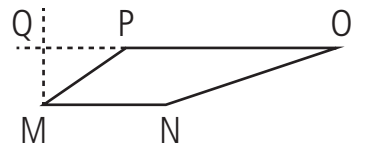


Nome Classe Data

L'AREA DEL TRAPEZIO

- Completa la seguente tabella prendi le misure dei segmenti, scriville secondo le marche indicate, effettua i calcoli per calcolare le aree.

Trapezi	Dati	Misura dell'area
	<p>AB = cm</p> <p>DC = dm</p> <p>AD = cm</p> <p>DH = mm</p>	<p>in cm²</p> <p>.....</p> <p>.....</p> <p>.....</p> <p>.....</p> <p>.....</p>
	<p>EF = dm</p> <p>FG = = cm</p> <p>LG = cm</p> <p>GK = dm</p>	<p>in dm²</p> <p>.....</p> <p>.....</p> <p>.....</p> <p>.....</p> <p>.....</p>
	<p>MN = cm</p> <p>NO = mm</p> <p>PO = cm</p> <p>MQ = 28 mm</p>	<p>in mm²</p> <p>.....</p> <p>.....</p> <p>.....</p> <p>.....</p> <p>.....</p>

CALCOLARE L'AREA DEL TRAPEZIO; EFFETTUARE MISURAZIONI DI SEGMENTI CON STRUMENTI.